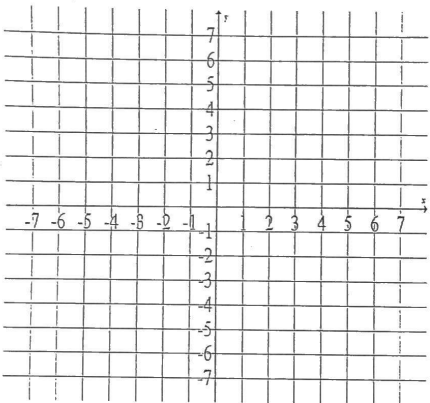


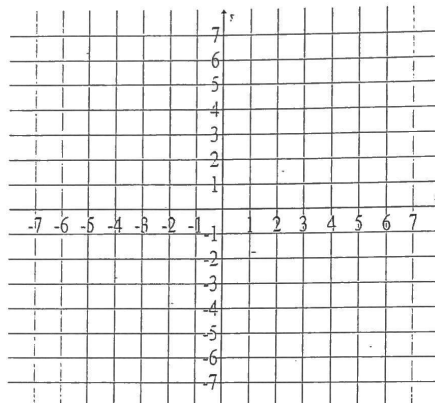
01 : Homework for Finding Distance Between Two Points on Graph Paper (and Slope!)

Using the graph paper, plot the points, sketch a slope triangle and find the distance between the 2 given points.

1)  $(1, 7)$  and  $(5, 4)$

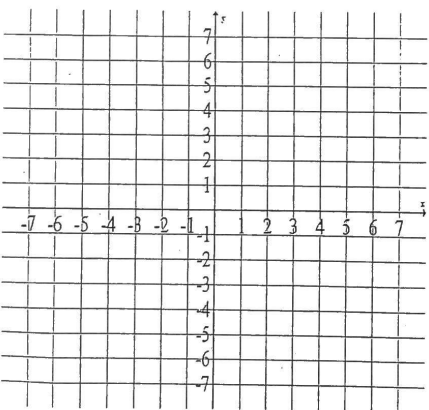


3)  $(-6, -3)$  and  $(6, 2)$



Then find the slope.

2)  $(-5, 2)$  and  $(4, -6)$



4)  $(-7, -2)$  and  $(3, -5)$

