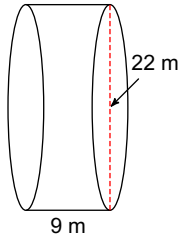


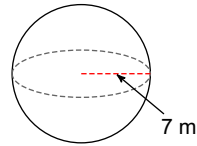
Day 4 HW

Find the surface area and volume of each figure. Round your answers to the nearest hundredth, if necessary.

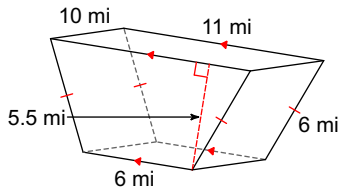
1)



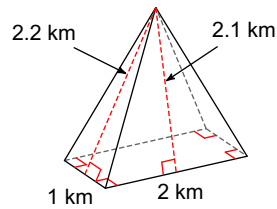
2)



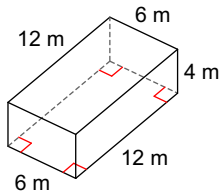
3)



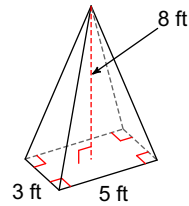
4)



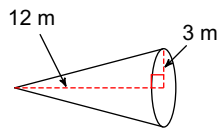
5)



6)



7)



8)

